

# ENGLISH HOLIDAYS HOMEWORK (2019 – 2020)

## Class - V

\* 17th June is “Father’s Day”. Make it special for your father and surprise him in a thoughtful manner. Write how you made it special for him.

\*DESIGN AN ENGLISH MAGAZINE:

- a. Design an attractive cover page of the magazine.
- b. Give a creative name to the magazine
- c. The page of proverbs
- d. Crossword
- e. Advertisement (Draw it yourself Chocolate, Cold drinks, Stationery items)
- f. Cartoon Strip (Draw it yourself) (any three)

\*Visit the following websites under the supervision and guidance of your parents and enjoy doing these grammar exercises and playing grammar games with other members of your family whenever you have some time.

[https://www.eduplace.com/kids/hme/k\\_5/grammar/](https://www.eduplace.com/kids/hme/k_5/grammar/)

<https://learnenglishkids.britishcouncil.org/en/grammar-practice>

\*Rearrange the letters to make meaningful words

There are clues to help you. The first one is done for you.

1. OMEH : It rhymes with DOME. We all live in it. HOME
2. LALB : It rhymes with CALL. We play with it. \_\_\_\_\_
3. YALZ : It rhymes with HAZY. It is opposite of active. \_\_\_\_\_
4. YREAL : It rhymes with CURLY. It is the opposite of late. \_\_\_\_\_
5. PMJU : It rhymes with HUMP. You often do it. \_\_\_\_\_
6. WLSO : It rhymes with GLOW. It is the opposite of fast. \_\_\_\_\_

\* Rhyming Fun

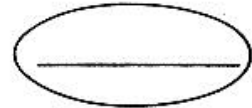
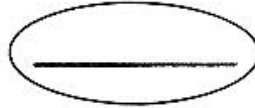
Add words to rhyme with the given word



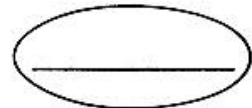
**f r o g**



**l o l l**



**h e a p**



V. Find words hidden in the given grid. One has been done for you :

1. greed

6. ....

2. ....

7. ....

3. ....

8. ....

4. ....

9. ....

5. ....

10. ....

t	g	s	o	r	r	o	w
h	r	g	r	i	e	f	h
i	e	l	p	a	i	n	a
r	e	o	f	e	a	r	t
s	d	v	j	o	y	x	e
t	x	e	a	n	g	e	r
e	p	q	m	a	c	p	t

### \*COMPOUND WORDS

Match the two groups of words to make compound words :

birth

screw

rain

break

air

foot

path

driver

fast

day

port

bow

1. \_\_\_\_\_
2. \_\_\_\_\_
3. \_\_\_\_\_
4. \_\_\_\_\_
5. \_\_\_\_\_
6. \_\_\_\_\_

\*Draw the picture of your favorite ice cream and write five lines about it.

---

---

---

---

---

---

---

---

---

## MATHEMATICS

### OBJECTIVE TYPE

1. Smallest 9 digit number is \_\_\_\_\_.
2. Predecessor of smallest 6-digit number has \_\_\_\_\_ digits.
3. Greatest 7 digit number is \_\_\_\_\_
4.  $9,00,00,000 + 80,00,000 + 7,00,000 + 80,000 + 0 + 900 + 60 + 2 =$  \_\_\_\_\_
5. 7<sup>th</sup> multiple of 12 is \_\_\_\_\_
6. Form the smallest 7-digit number using digits 1,0,3,4,2,8,9 \_\_\_\_\_
7.  $4 \times 5 = 20$  : 20 is a multiple of \_\_\_\_\_ and \_\_\_\_\_
8. Form the greatest 6-digit number using digits 2,0,1,5,6,9 \_\_\_\_\_
9. Smallest even number is \_\_\_\_\_
10. Smallest odd number is \_\_\_\_\_
11. Is 11 a factor of 77 ?( yes /no)
12. Is 14 a factor of 140? (yes/no)
13.  $8 \times 9 = 72$ ; 8 and 9 are \_\_\_\_\_ of 72.

14. Digits in the ones place of product of  $732 \times 412$  \_\_\_\_\_

15. One lakh = \_\_\_\_\_ thousands

16. One million = \_\_\_\_\_ lakh

17. Compare

a)  $182.6$  ( )  $181.32$

b)  $4.182$  ( )  $4.13$

18. 489 is a \_\_\_\_\_ number (even/odd)

19.  $489 \times 4000 =$  \_\_\_\_\_

20.  $25 \times$  \_\_\_\_\_  $= 25000$

### **SUBJECTIVE TYPE**

1. Write the number names

a) 178,206,119

b) 58,16,25,100

2. Write numeral for

a) Seven crores eighteen lakh fifty five thousand ten

b) Fifty five million six hundred five thousand nine

3. Arrange and add:

1,42,70,149 ; 13,12,928 ; 69,18,159

4. Subtract 3,49,608 from four lakhs

5. Find the product

a)  $21262 \times 684$

b)  $41118 \times 289$

6. Mr. Rahul earns Rs. 51,184 every month. How much will he earn in 6 years?

7. Subtract 1,43,60,199 from sum of 70,18,189 and 28,20,499

8. Find product of greatest 5-digit and greatest 3-digit number.

9. Find the L.C.M of given numbers by listing their multiples

a) 6, 18, 36

b) 4, 12, 24

10. Write all factors of

a) 45      b) 48      c) 17

11. A box can fit 150 apples in it. How many apples can be fitted in 68 such boxes?

12. 563 pens can be packed in a carton. How many cartons are required to pack 18241275 pens?

13. Write period, place, place value and face value of bold digits

a) 42,79,**62**,184      b) 208,449,1**08**

14. The difference of two numbers is 4809681 if greater number is 8909196, find the smaller number.

15. What should be added to 17469 to get 30184?

16. Product of two numbers is 269336, if one number is 262, find the other number.

17. The difference between two numbers is 417899. If the smaller number is 8458 find the greater number.

18. Divide and check.

a) 325874 by 589

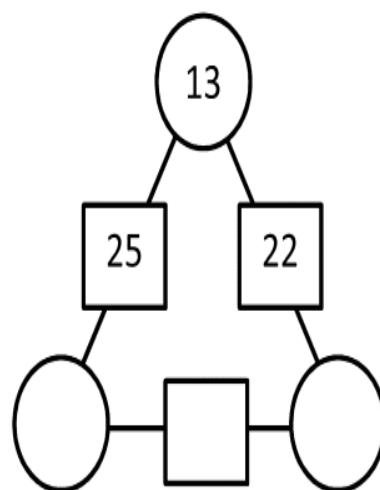
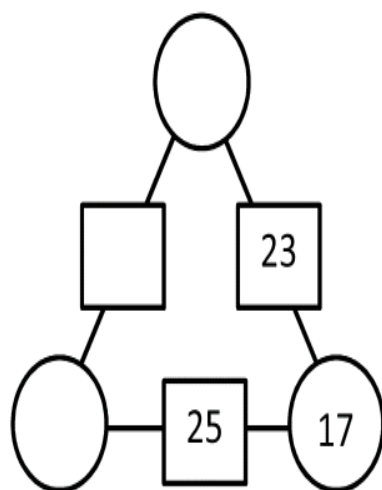
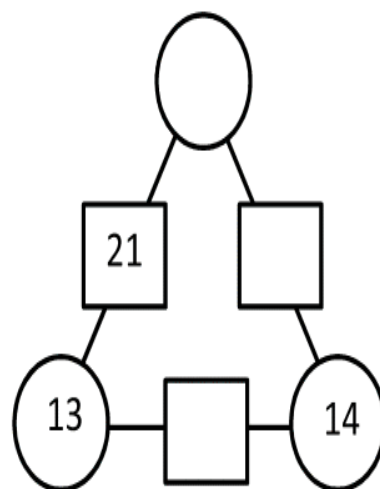
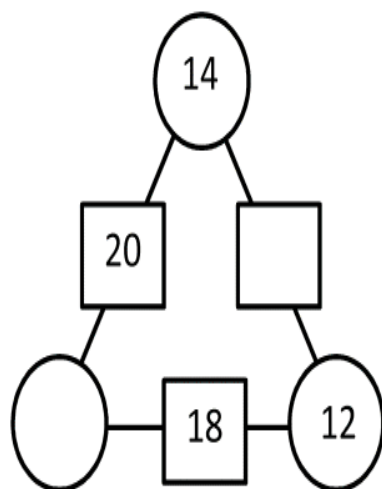
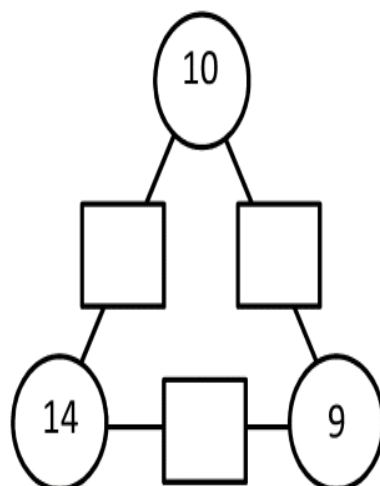
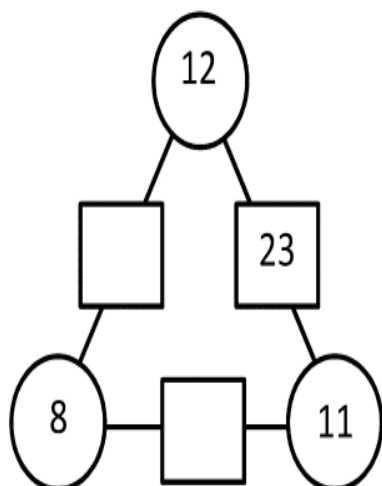
b) 257862 by 328

c) 42108 by 161

**ACTIVITY:**

1. Draw and colour a rangoli design using mathematical figures.
2. Keep a record of temperature of a week and arrange them in ascending order and also find out the difference between maximum and minimum temperature of that week.
3. Paste the bills of money spent during your visit to some places.(minimum five bills)
4. Design any object using mathematical shapes (make best use of waste material).
5. Complete the activity sheets attached along:

The numbers in the circles added together makes the number in the linking rectangle. Find the missing numbers in this puzzle.







# My Weather Report!

[illegible]



## SCIENCE

### MIND-BENDER

Make your own crossword puzzle of interlocking words using minimum 10 words from My living word (Science text book)

L-1- My Body

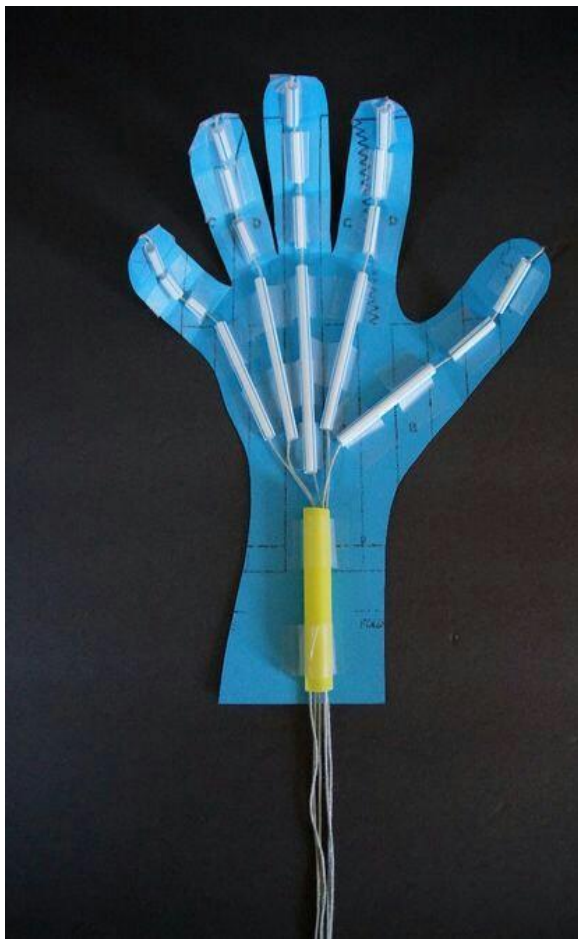
L-2- Importance of water

Draw and make it colourful on A4 ivory sheet.

### ROBOT HAND PROJECT

Gather your supplies and get ready for the fun to make robotic hand that didn't need any tinkering.

Look at the picture and use your own creativity to make this.



**Read the instructions given in the pictures and make a rainbow disc to show light consists of seven colours.**



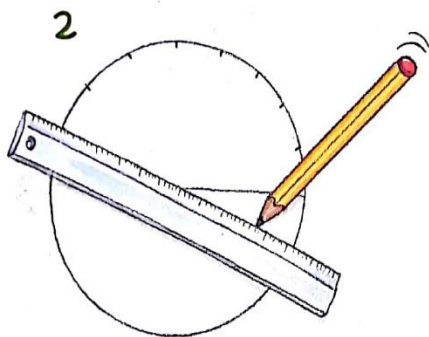

## The rainbow disc

**You will need:**

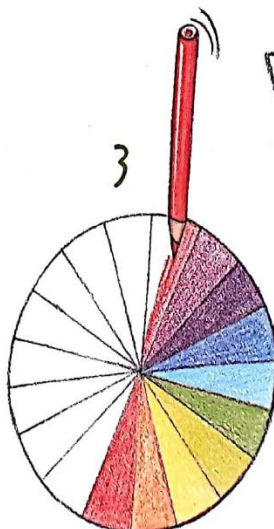
- ◆ An old CD
- ◆ A glue stick
- ◆ A sheet of white paper
- ◆ A pencil
- ◆ Coloured pencils (the seven colours of the rainbow)
- ◆ A ruler
- ◆ A marble (the toy)

**1** Draw around the CD on the sheet of paper with the pencil. Also mark the centre point. Remember that it should be an old CD you don't play anymore, because you won't be able to get it back.

**2** Use the ruler to divide the circle in half. Mark as many points as possible about 2 cm apart on the circumference. Then draw lines joining the dots with the centre.




**3** Colour in the resulting arcs. They will end up like pie pieces. Be careful to follow the order of the colours of the rainbow. That is, violet, indigo, blue, green, yellow, orange and red.



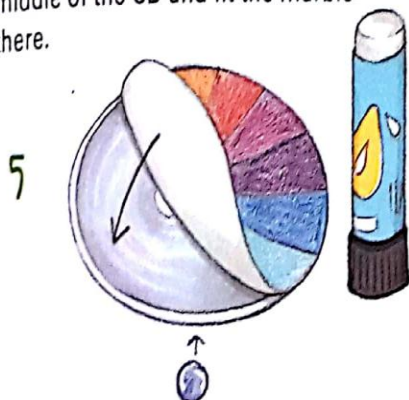
**4**

**4** Cut out the circle following the outline drawn with the pencil, but without cutting any of the pieces accidentally! Keep your hands from shaking!





**5** Paste the circle on the CD with the glue stick (on the white part, of course). Make a hole in the paper corresponding to the hole in the middle of the CD and fit the marble there.



### Why does this happen?

When you spin the CD very fast, all the colours are combined and form the white colour that you see. You have just demonstrated that white light is the sum of all the colours of the rainbow (red, orange, yellow, green, blue, indigo and violet), whereas black is the opposite: it is the absence of colour. That's why you see the colour of each object, because when an object receives white light (the sum of all the colours), it absorbs all the colours apart from its own colour, which means that you see the colour the object is.

### 6 Try it out!

Place the CD on a table and make your coloured circle spin as fast as possible. Faster, faster! What colours did you see? All of them? Or none? Whoops!



## **SOCIAL SCIENCE**

1. Read newspaper during summer vacation and write five news on given topics (Business, Politics, Ludhiana city, Sports, Weather etc.) in your scrap book. Learn and write the vocabulary related to these news.
  2. Van Mahotsava is celebrated by planting trees in first week of July every year. Plant one tree in summer vacation and paste your picture where have you planted the tree.
  3. During vacation improve your culinary skills .Learn fire less cooking at home. Make one dish and write its recipe.
  4. Map skill- Name and locate the given feature in political map of the world.
- Five Ocean and Continents
  - Countries (Japan, China, U.S.A, Brazil, Mexico, Spain, France, U.K, Australia, Canada, Argentina and neighbouring countries of India.

## **GENERAL HOMEWORK**

### **ACTIVITY** – Health & fitness

#### **Healthy eating habits and weight management**

- All the students will do the following activities during summer vacation.
- A 20-30 minute brisk walk (evening/morning), jogging/rope skipping
- Keep a record of your meals – Everyday breakfast, lunch, dinner, junk food, if any
- Weight monitoring every Monday (gain/loose)

**Record the above information on A4 size sheet.**

